



40 Utiliser des stratégies de calcul

✓ J'utilise des stratégies de calcul pour additionner trois nombres.


1 Calcule en regroupant les doubles.



$$\begin{array}{r}
 6 + 6 + 2 \\
 \swarrow \quad \searrow \quad | \\
 12 + 2 \\
 \swarrow \quad \searrow \\
 14
 \end{array}$$




$$\begin{array}{r}
 8 + 8 + 1 \\
 \swarrow \quad \searrow \quad | \\
 \dots + \dots \\
 \swarrow \quad \searrow \\
 \dots
 \end{array}$$




$$\begin{array}{r}
 \dots + \dots + \dots \\
 \swarrow \quad \searrow \quad | \\
 \dots + \dots \\
 \swarrow \quad \searrow \\
 \dots
 \end{array}$$


2 Calcule en regroupant les nombres qui font 10.



$$\begin{array}{r}
 3 + 7 + 5 \\
 \swarrow \quad \searrow \quad | \\
 10 + 5 \\
 \swarrow \quad \searrow \\
 15
 \end{array}$$



$$\begin{array}{r}
 4 + 6 + \dots \\
 \swarrow \quad \searrow \quad | \\
 \dots + \dots \\
 \swarrow \quad \searrow \\
 \dots
 \end{array}$$



$$\begin{array}{r}
 \dots + \dots + \dots \\
 \swarrow \quad \searrow \quad | \\
 \dots + \dots \\
 \swarrow \quad \searrow \\
 \dots
 \end{array}$$

Trace à main levée.

